

Junior Youth of the Year Written Test Study Guide

Part 1 - Short Answer

1. The tool used to restrain a horse by applying pressure to the lip is called a _____.
2. A horse's complete name, including letters, punctuation and blanks shall not exceed _____ characters.
3. Name three parts of the horse that begin with the letter "C". _____, _____, _____.
4. Commonly used stall bedding is straw, shavings and _____.
5. When picking out hooves you should work downwards from the _____ to the _____.
6. Horses should always have _____ and _____ water.
7. Check horse daily to see that they have not been _____.
8. Feed at least _____ times a day.
9. Justin Morgan earned the nickname _____.
10. What are the names of Justin Morgan's three most famous sons, _____, _____, _____.
11. Black Hawk was jet black and noted for his beauty and speed at the trot. He sired over _____ foals.
12. Cleaning a horse is called _____.
13. A foal that is still nursing _____.
14. A weanling is a foal that is _____.
15. The maximum height of a pony before it is called a horse is _____.
16. The piece of tack that is used when catching, leading or handling a horse is called _____.
17. A mild bit that acts on the bars and lips is a _____; a direct pull on the reins exerts a direct pull on the horse's mouth.
18. A series of right and left circles in a riding pattern is a _____.
19. Always use a _____ knot when tying a horse.
20. Always speak to your horse _____ approaching or touching him.
21. To find out how tall your horse is, you measure from the ground to the highest point of the _____.
22. A newborn colt or filly is called a _____.
23. What is it called when a horse has a stomachache? _____
24. What is the disease of the foot that has a very bad odor? _____

Part 2 - True / False Questions

25. _____ If your horse is frightened and starts to run, turn him in a circle and tighten the circle until he stops.
26. _____ When setting up a horse to show In-Hand, position his front legs first then push the back legs into position.
27. _____ The two bits in a Weymouth bridle are the bridoon and the curb.
28. _____ In Morgan western pleasure classes, the hand holding the reins may be changed at any time.
29. _____ The length of toe is measured from the ground to the coronary band
30. _____ The walk has 4 beats
31. _____ The trot is a 2 beat gait.
32. _____ The Coggins test is used to detect Equine Infectious Anemia.
33. _____ You should feed your horse once a day.
34. _____ Founder may be caused by an overheated animal drinking cold water.
35. _____ When showing in an AMHA medal class a rider must be on a mare or gelding that is registered with the AMHA.
36. _____ The U.S. Morgan Horse farm is in New York.
37. _____ A horse should be given a booster shot against EEE, VEE and WEE every year.
38. _____ The trot is a four beat gait.
39. _____ A pedigree is a record of a horse's ancestry.
40. _____ A bay horse has a flaxen mane and tail.
41. _____ Protective headgear with a harness is correct attire for saddleseat classes.

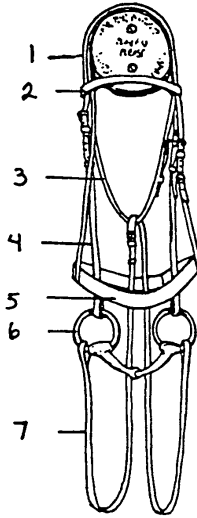
Part 3 Multiple Choice

42. A white mark between the nostrils is called:
A. Blaze
B. Star
C. Snip
D. Stripe
43. What is the first thing the judge looks for in a junior exhibitor or ladies class?
A. Manners
B. Attire
C. Conformation
D. Quality
44. When approaching a horse, you should come towards him:
A. At his shoulder
B. Directly from the front
C. From the rear
D. At the hip
45. A stable vice in which the horse shifts his weight back and forth from one foreleg to the other is called:
A. Weaving
B. Hitching
C. Paddling
D. Cribbing
46. When a horse is frightened, what is his first impulse?
A. To neigh loudly
B. To stand and paw the ground
C. To run away
D. To turn and fight
47. A horse's height is measured in:
A. inches
B. hands
C. meters
D. units

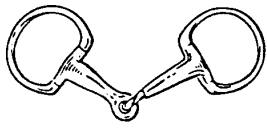
48. General Custer's famous horse, and the only survivor of Little Big Horn was:
 A. Comanche
 B. Rienzi
 C. Ethan Allen-50
 D. Sherman
49. General Sheridan's famous horse was:
 A. Rienzi
 B. Comanche
 C. Morrill
 D. Woodbury
50. Which is not a symptom of colic?
 A. restlessness
 B. kicking at belly
 C. going off feed
 D. "tying-up"

Identifying Tack – Write the name of the correct part in the blank next to the corresponding number.

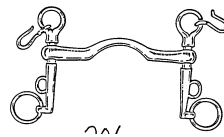
51. (1) _____
 52. (2) _____
 53. (3) _____
 54. (4) _____
 55. (5) _____
 56. (6) _____
 57. (7) _____



Identify the bit by writing the name of the bit in the blank under the picture.



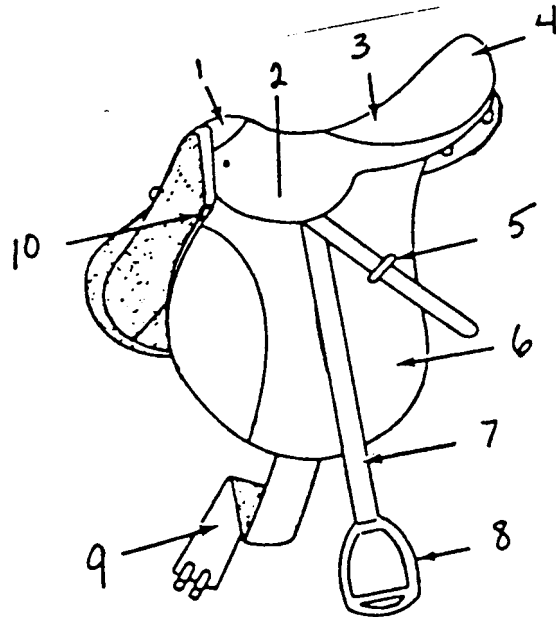
58. _____



59. _____

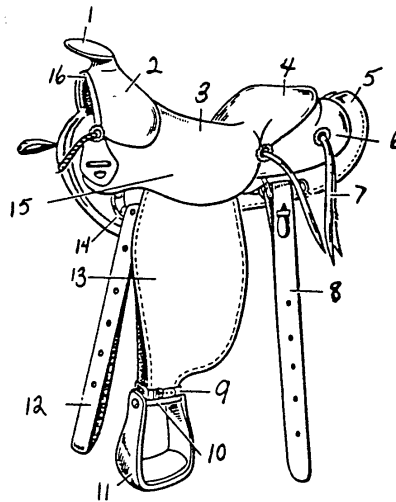
Identify the part of the saddle by putting the number in the blank next to the correct name for the part.

- 60. ____ Skirt
- 61. ____ Girth
- 62. ____ Stirrup Leather
- 63. ____ Leather keeper
- 64. ____ Seat
- 65. ____ Cantle
- 66. ____ Flap
- 67. ____ Head
- 68. ____ Stirrup Iron




Identify the parts of the Western saddle- Put the correct number in front of the correct part.

- 69. ____ Cinch strap
- 70. ____ Fender
- 71. ____ Skirt
- 72. ____ Seat
- 73. ____ Cantle
- 74. ____ Horn
- 75. ____ Stirrup



Identify the picture by writing the proper name on the blank under each picture.

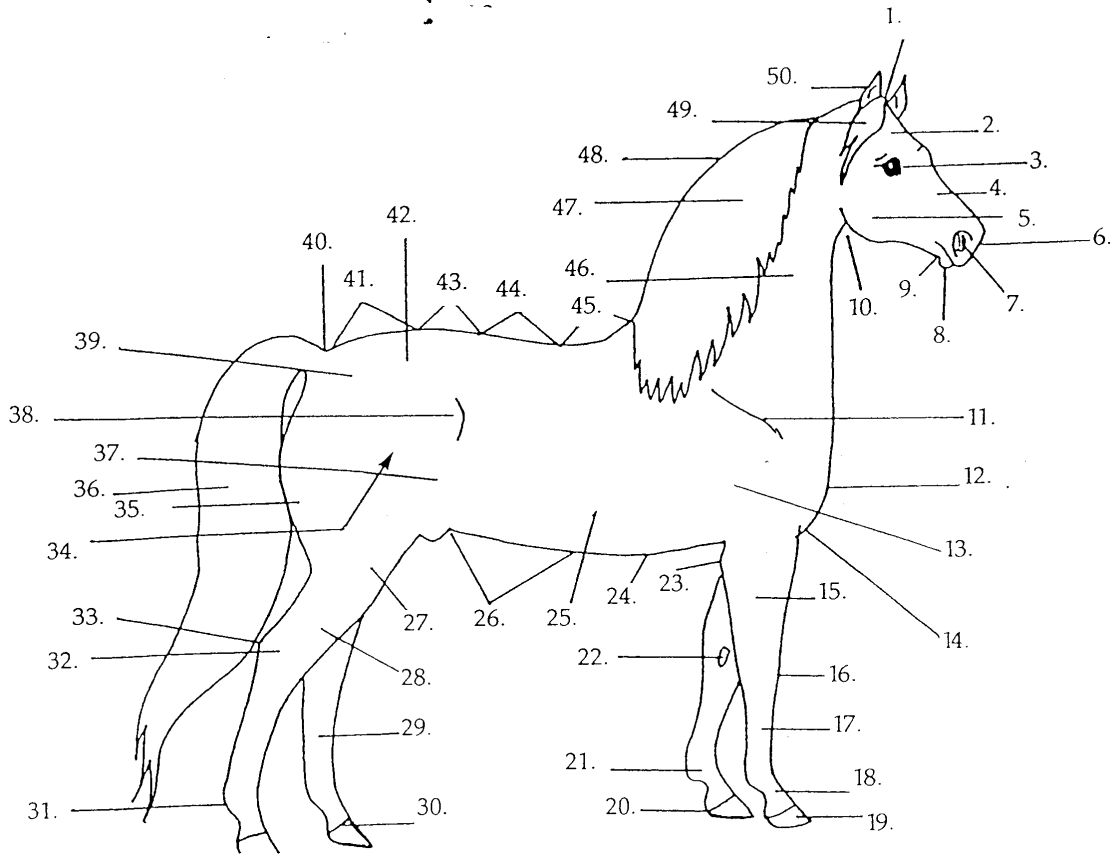


76. _____

77. _____

78. _____

Identify Parts of the Horse – Write the name of the correct part in the blank next to the corresponding number.



- | | | |
|---------------|---------------|----------------|
| 79.(19) _____ | 89.(18) _____ | 99.(30) _____ |
| 80.(16) _____ | 90.(6) _____ | 100.(29) _____ |
| 81.(32) _____ | 91.(3) _____ | |
| 82.(50) _____ | 92.(22) _____ | |
| 83.(48) _____ | 93.(49) _____ | |
| 84.(47) _____ | 94.(15) _____ | |
| 85.(44) _____ | 95.(40) _____ | |
| 86.(45) _____ | 96.(41) _____ | |
| 87.(36) _____ | 97.(10) _____ | |
| 88.(17) _____ | 98.(23) _____ | |